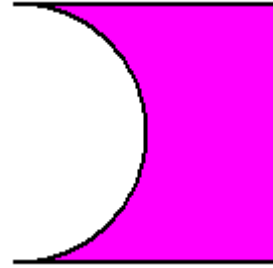


## MATC9 Ch2.4 Key Concepts 1 Composite Figures Worked Example


**Example:** Explain why the figure shown is a composite figure.

**Solution:** This figure is composite since it is made up of simple figures. It is a rectangle with a cutout formed by half a circle.

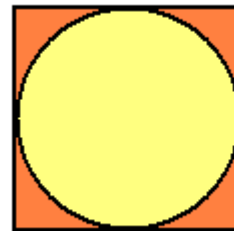


**Practice:**

1. Identify the simple shapes making up the composite figure shown.



2. Identify the simple shapes making up the composite figure shown.



Answers: 1. two rectangles 2. a square and a circle