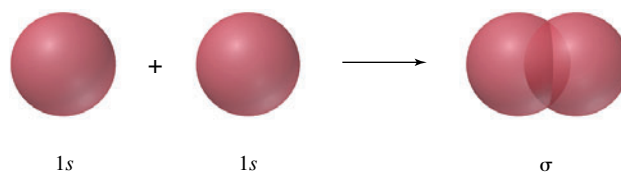


2.23 SUMMARY

Section 2.1 The classes of hydrocarbons are **alkanes, alkenes, alkynes, and arenes**. Alkanes are hydrocarbons in which all of the bonds are *single* bonds and are characterized by the molecular formula C_nH_{2n+2} .

Section 2.2 Two theories of bonding, **valence bond** and **molecular orbital theory**, are based on the wave nature of an electron. Constructive interference between the electron wave of one atom and that of another gives a region between the two atoms in which the probability of sharing an electron is high—a bond.

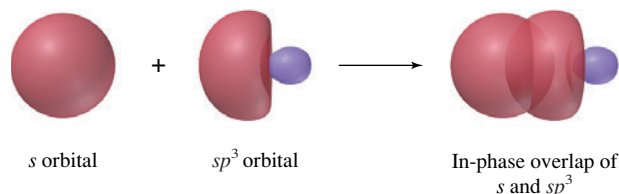
Section 2.3 In valence bond theory a covalent bond is described in terms of in-phase overlap of a half-filled orbital of one atom with a half-filled orbital of another. When applied to bonding in H_2 , the orbitals involved are the $1s$ orbitals of two hydrogen atoms and the bond is a σ bond.



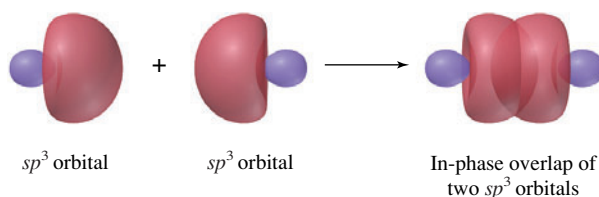
Section 2.4 In molecular orbital theory, the molecular orbitals (MOs) are approximated by combining the atomic orbitals (AOs) of all of the atoms in a molecule. The number of MOs must equal the number of AOs that are combined.

Section 2.5 The first three alkanes are methane (CH_4), ethane (CH_3CH_3), and propane ($CH_3CH_2CH_3$).

Section 2.6 Bonding in methane is most often described by an **orbital hybridization** model, which is a modified form of valence bond theory. Four equivalent sp^3 hybrid orbitals of carbon are generated by mixing the $2s$, $2p_x$, $2p_y$, and $2p_z$ orbitals. Overlap of each half-filled sp^3 hybrid orbital with a half-filled hydrogen $1s$ orbital gives a σ bond.



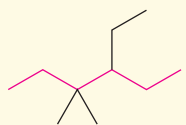
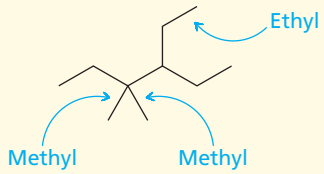
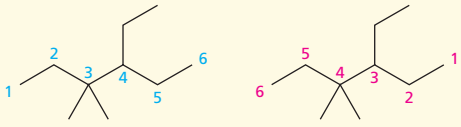
Section 2.7 The carbon–carbon bond in ethane is a σ bond in which an sp^3 hybrid orbital one carbon overlaps with an sp^3 hybrid orbital of the other.



- Section 2.8 Two constitutionally isomeric alkanes have the molecular formula C_4H_{10} . One has an unbranched chain ($CH_3CH_2CH_2CH_3$) and is called ***n*-butane**; the other has a branched chain [$(CH_3)_3CH$] and is called **isobutane**. Both *n*-butane and isobutane are **common names**.
- Section 2.9 Unbranched alkanes of the type $CH_3(CH_2)_xCH_3$ are often referred to as *n*-alkanes, and are said to belong to a **homologous series**.
- Section 2.10 There are three constitutional isomers of C_5H_{12} : ***n*-pentane** ($CH_3CH_2CH_2CH_2CH_3$), **isopentane** [$(CH_3)_2CHCH_2CH_3$], and **neopentane** [$(CH_3)_4C$].
- Sections 2.11–2.15 A single alkane may have several different names; a name may be a common name, or it may be a *systematic name* developed by a well-defined set of rules. The most widely used system is **IUPAC nomenclature**. Table 2.6 summarizes the rules for alkanes and cycloalkanes. Table 2.7 gives the rules for naming alkyl groups.

TABLE 2.6

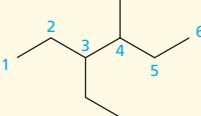
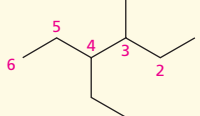
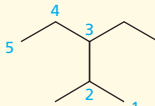
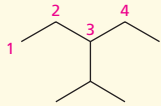
Summary of IUPAC Nomenclature of Alkanes and Cycloalkanes

Rule	Example
A. Alkanes	
1. Find the longest continuous chain of carbon atoms, and assign a basis name to the compound corresponding to the IUPAC name of the unbranched alkane having the same number of carbons.	<p>The longest continuous chain in the alkane shown is six carbons.</p> 
2. List the substituents attached to the longest continuous chain in alphabetical order. Use the prefixes <i>di-</i> , <i>tri-</i> , <i>tetra-</i> , and so on, when the same substituent appears more than once. Ignore these prefixes when alphabetizing.	<p>This alkane is named as a derivative of <i>hexane</i>.</p> <p>The alkane bears two methyl groups and an ethyl group. It is an <i>ethyl</i>dimethyl<i>hexane</i>.</p> 
3. Number the chain in the direction that gives the lower locant to a substituent at the first point of difference.	<p>When numbering from left to right, the substituents appear at carbons 3, 3, and 4. When numbering from right to left the locants are 3, 4, and 4; therefore, number from left to right.</p> 
	<p>The correct name is 4-ethyl-3,3-dimethylhexane.</p>

(Continued)

TABLE 2.6

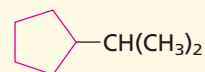
Summary of IUPAC Nomenclature of Alkanes and Cycloalkanes (*Continued*)

Rule	Example
4. When two different numbering schemes give equivalent sets of locants, choose the direction that gives the lower locant to the group that appears first in the name.	<p>In the following example, the substituents are located at carbons 3 and 4 regardless of the direction in which the chain is numbered.</p> <div style="display: flex; justify-content: space-around; align-items: center;"> <div style="text-align: center;">  <p>Correct</p> </div> <div style="text-align: center;">  <p>Incorrect</p> </div> </div> <p>Ethyl precedes methyl in the name; therefore <i>3-ethyl-4-methylhexane</i> is correct.</p>
5. When two chains are of equal length, choose the one with the greater number of substituents as the parent. (Although this requires naming more substituents, the substituents have simpler names.)	<p>Two different chains contain five carbons in the alkane:</p> <div style="display: flex; justify-content: space-around; align-items: center;"> <div style="text-align: center;">  <p>Correct</p> </div> <div style="text-align: center;">  <p>Incorrect</p> </div> </div> <p>The correct name is <i>3-ethyl-2-methylpentane</i> (disubstituted chain), rather than <i>3-isopropylpentane</i> (monosubstituted chain).</p>

B. Cycloalkanes

- Count the number of carbons in the ring, and assign a basis name to the cycloalkane corresponding to the IUPAC name of the unbranched cycloalkane having the same number of carbons.
- Name the alkyl group, and append it as a prefix to the cycloalkane. No locant is needed if the compound is a monosubstituted cycloalkane. It is understood that the alkyl group is attached to C-1.
- When two or more different substituents are present, list them in alphabetical order, and number the ring in the direction that gives the lower number at the first point of difference.
- Name the compound as a cycloalkyl-substituted alkane if the substituent has more carbons than the ring.

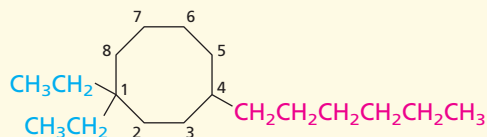
The compound shown contains five carbons in its ring.

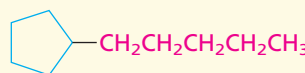


It is named as a derivative of *cyclopentane*.

The previous compound is *isopropylcyclopentane*. Alternatively, the alkyl group can be named according to the rules summarized in Table 2.7, whereupon the name becomes *(1-methylethyl)cyclopentane*. Parentheses are used to set off the name of the alkyl group as needed to avoid ambiguity.

The compound shown is *1,1-diethyl-4-hexylcyclo-octane*.



 is *pencyclohexane*
but

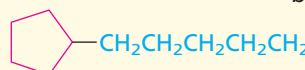
 is *1-cyclopentylhexane*

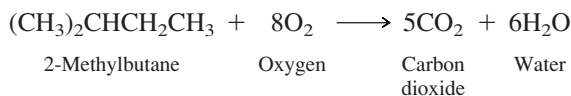
TABLE 2.7 Summary of IUPAC Nomenclature of Alkyl Groups

Rule	Example
1. Number the carbon atoms beginning at the point of attachment, proceeding in the direction that follows the longest continuous chain.	The longest continuous chain that begins at the point of attachment in the group shown contains six carbons. <div style="text-align: center;"> $\begin{array}{cccccccc} & & & 1 & 2 & 3 & 4 & 5 & 6 \\ & & & & & & & & \\ \text{CH}_3 & \text{CH}_2 & \text{CH}_2 & \text{C} & \text{CH}_2 & \text{CH} & \text{CH}_2 & \text{CH}_2 & \text{CH}_3 \\ & & & & & & & & \\ & & & \text{CH}_3 & & \text{CH}_3 & & & \end{array}$ </div>
2. Assign a basis name according to the number of carbons in the corresponding unbranched alkane. Drop the ending <i>-ane</i> and replace it by <i>-yl</i> .	The alkyl group shown in step 1 is named as a substituted <i>hexyl</i> group.
3. List the substituents attached to the basis group in alphabetical order using replicating prefixes when necessary.	The alkyl group in step 1 is a <i>dimethylpropylhexyl</i> group.
4. Locate the substituents according to the numbering of the main chain described in step 1.	The alkyl group is a <i>1,3-dimethyl-1-propylhexyl</i> group.

Section 2.16 Natural gas is an abundant source of methane, ethane, and propane. Petroleum is a liquid mixture of many hydrocarbons, including alkanes. Alkanes also occur naturally in the waxy coating of leaves and fruits.

Section 2.17 Alkanes and cycloalkanes are nonpolar and insoluble in water. The forces of attraction between alkane molecules are **induced-dipole/induced-dipole** attractive forces. The boiling points of alkanes increase as the number of carbon atoms increases. Branched alkanes have lower boiling points than their unbranched isomers. There is a limit to how closely two molecules can approach each other, which is given by the sum of their **van der Waals radii**.

Section 2.18 Alkanes and cycloalkanes burn in air to give carbon dioxide, water, and heat. This process is called **combustion**.

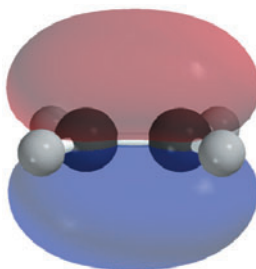


$$\Delta H^\circ = -3529 \text{ kJ } (-843.4 \text{ kcal})$$

The heat evolved on burning an alkane increases with the number of carbon atoms. The relative stability of isomers may be determined by comparing their respective **heats of combustion**. The more stable of two isomers has the lower heat of combustion.

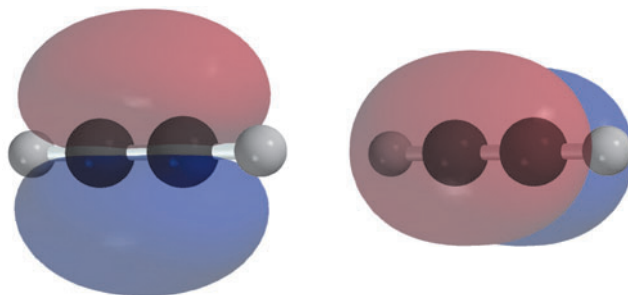
Section 2.19 Combustion of alkanes is an example of **oxidation–reduction**. Although it is possible to calculate oxidation numbers of carbon in organic molecules, it is more convenient to regard oxidation of an organic substance as an increase in its oxygen content or a decrease in its hydrogen content.

Section 2.20 Carbon is sp^2 -hybridized in ethylene, and the double bond has a σ component and a π component. The sp^2 hybridization state is derived by mixing the $2s$ and two of the three $2p$ orbitals. Three equivalent sp^2 orbitals result, and their axes are coplanar. Overlap of an sp^2 orbital of one carbon with an sp^2 orbital of another produces a σ bond between them. Each carbon still has one unhybridized p orbital available for bonding, and “side-by-side” overlap of the p orbitals of adjacent carbons gives a π bond between them.



The π bond in ethylene generated by overlap of p orbitals of adjacent carbons

Section 2.21 Carbon is sp -hybridized in acetylene, and the triple bond is of the $\sigma + \pi + \pi$ type. The $2s$ orbital and one of the $2p$ orbitals combine to give two equivalent sp orbitals that have their axes in a straight line. A σ bond between the two carbons is supplemented by two π bonds formed by overlap of the remaining half-filled p orbitals.



The triple bond of acetylene has a σ bond component and two π bonds; the two π bonds are shown here and are perpendicular to each other.

Section 2.22 Lewis structures, orbital hybridization, and molecular orbital descriptions of bonding are all used in organic chemistry. Lewis structures are used the most, MO descriptions the least. All will be used in this text.

PROBLEMS

2.20 The general molecular formula for alkanes is C_nH_{2n+2} . What is the general molecular formula for:

- | | |
|------------------|--|
| (a) Cycloalkanes | (c) Alkynes |
| (b) Alkenes | (d) Cyclic hydrocarbons that contain one double bond |