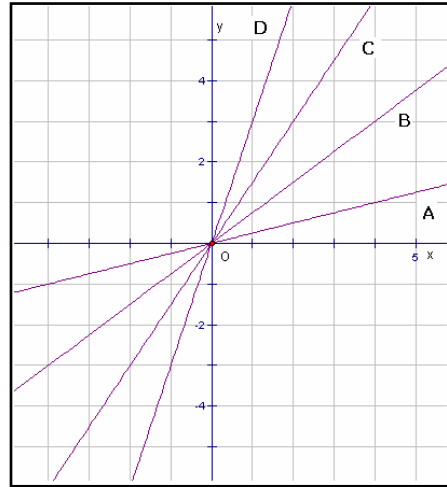


## Ch07.2 Key Concepts 1 The Meaning of Slope Worked Example

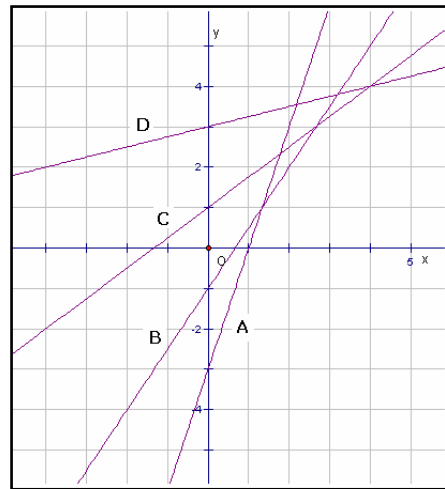
**Example:** Which of the lines shown has the greatest slope?

**Solution:** Slope is a measure of the steepness of a line. The line marked D is the steepest, and has the greatest slope.

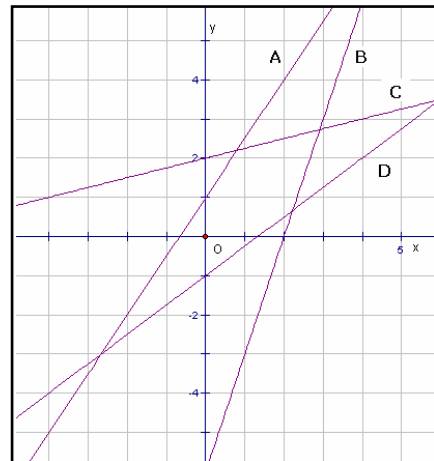


**Practice:**

1. Which of the lines shown has the greatest slope?



2. Which of the lines shown has the greatest slope?



Answers: 1. A 2. B.